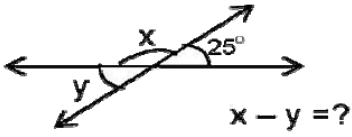


INTERAKTİF EĞİTİM
AÇILAR

1.




- A) 130 B) 150
C) 120 D) 140

2.

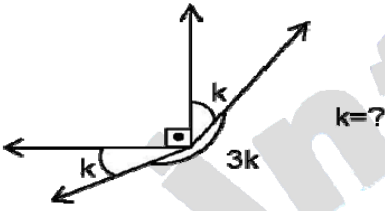
$x = \frac{y}{3}$ ise

$z = ?$



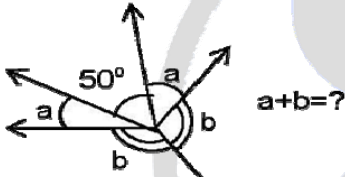
- A) 135 B) 145
C) 35 D) 45

3.



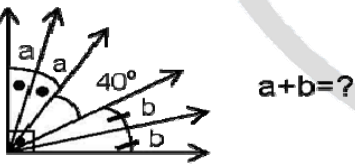
- A) 45 B) 54
C) 64 D) 65

4.



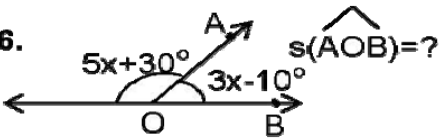
- A) 145 B) 165
C) 155 D) 125

5.



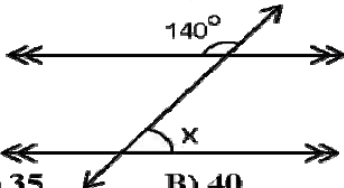
- A) 25 B) 45
C) 35 D) 55

6.



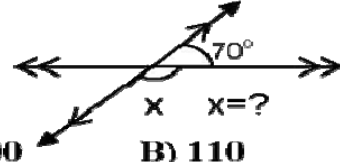
- A) 50 B) 70
C) 60 D) 80

7.



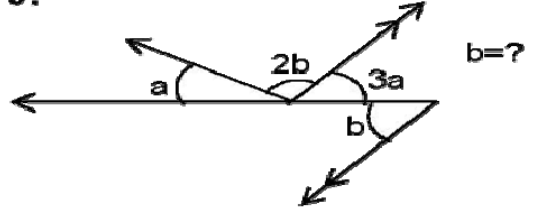
- A) 35 B) 40
C) 45 D) 50

8.



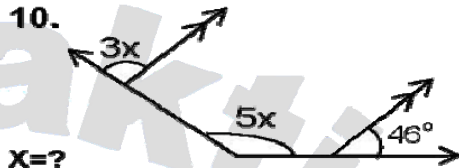
- A) 100 B) 110
C) 120 D) 125

9.



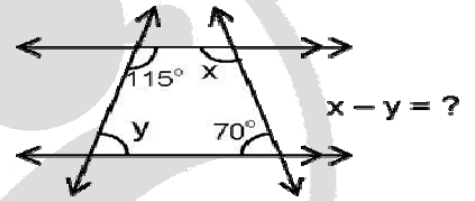
- A) 54 B) 64
C) 44 D) 56

10.



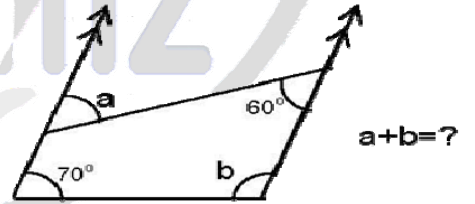
- A) 20 B) 25
C) 24 D) 23

11.



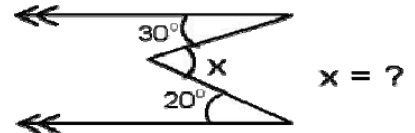
- A) 25 B) 30
C) 35 D) 45

12.



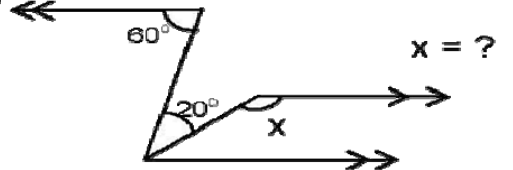
- A) 170 B) 160
C) 180 D) 150

13.

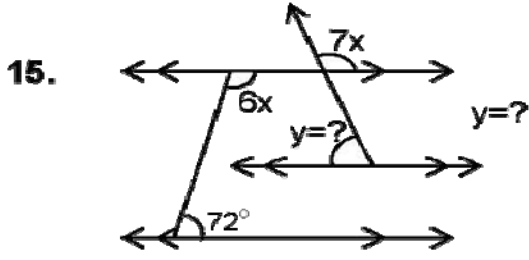


- A) 40 B) 50
C) 60 D) 70

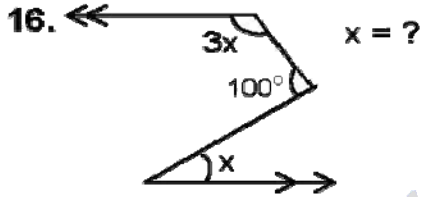
14.



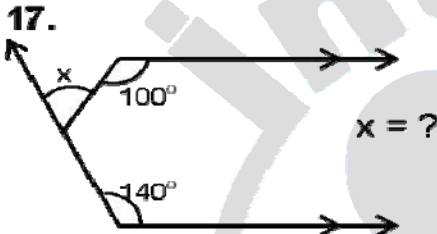
- A) 140 B) 150
C) 160 D) 170



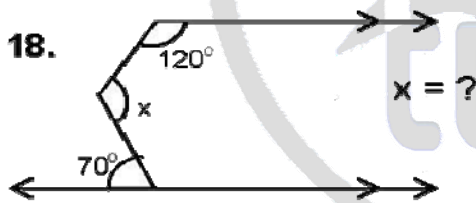
- A) 54 B) 57
C) 65 D) 74



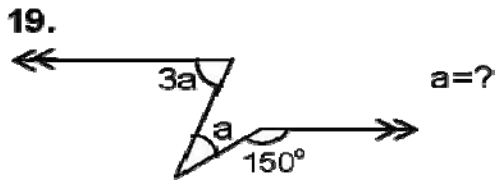
- A) 40 B) 60
C) 50 D) 70



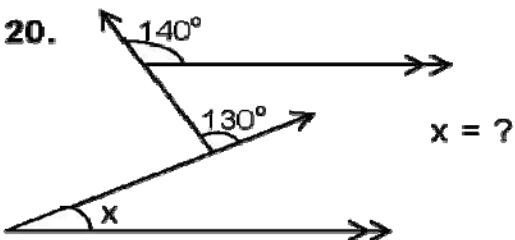
- A) 50 B) 60
C) 70 D) 80



- A) 120 B) 130
C) 140 D) 150



- A) 10 B) 20
C) 15 D) 25



- A) 20 B) 30
C) 10 D) 15

CEVAP ANAHTARI

1. A
2. D
3. B
4. C
5. A
6. A
7. B
8. B
9. A
10. D
11. D
12. C
13. B
14. A
15. A
16. A
17. B
18. B
19. C
20. C

NOT: Ziyaretçilerimiz tarafından eklenen internet paylaşımıdır. Cevap anahtarı yanlış olabilir. Şüphelendiğiniz soruları lütfen kontrol ediniz.

