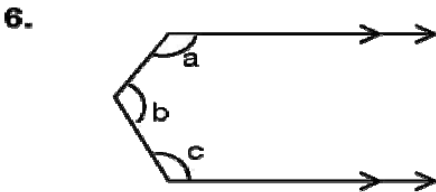
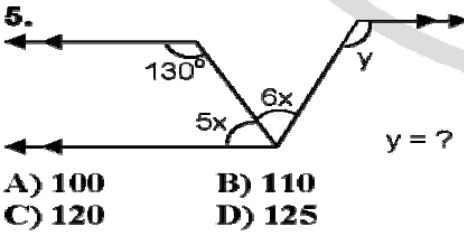
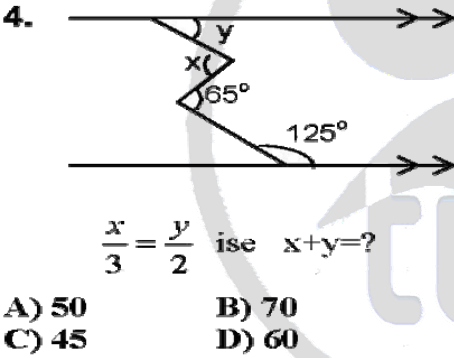
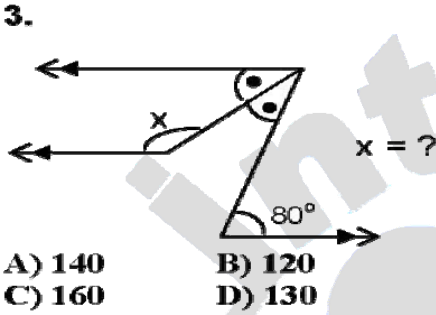
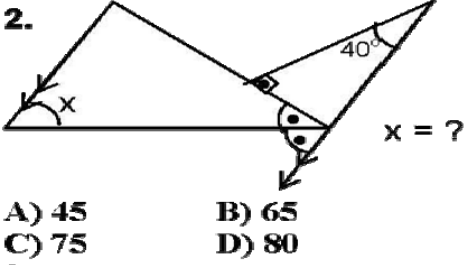
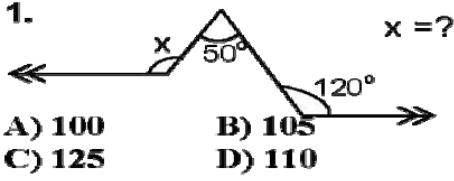
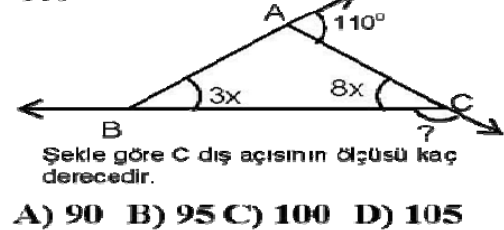
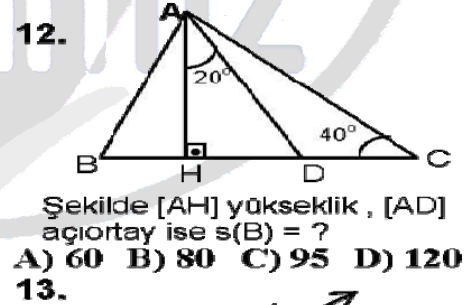
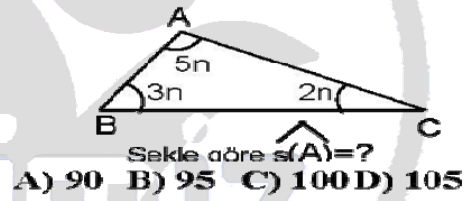
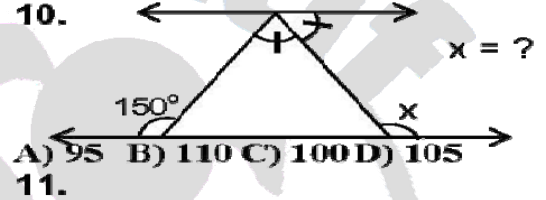
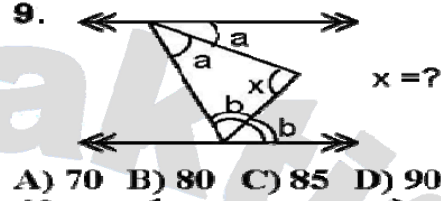
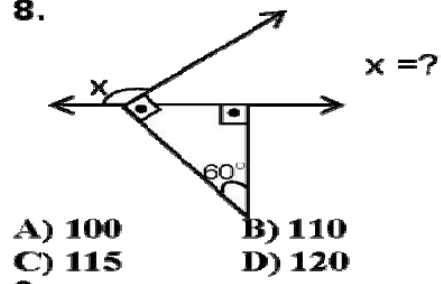
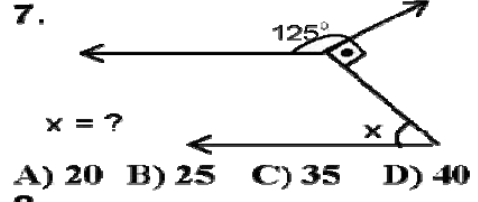


İNTERAKTİF EĞİTİM  
AÇILAR

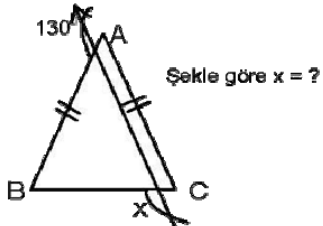


$a, b, c$ ,  $a$ ' dan  $c$ ' ye doğru 5' er artan ardışık dizi ise  $c = ?$   
A) 100 B) 110  
C) 125 D) 120



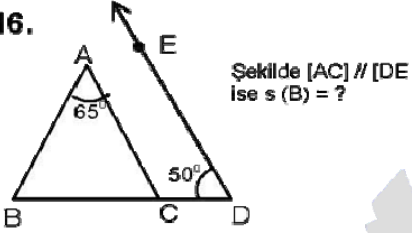
A) 126 B) 125 C) 124 D) 120

15.



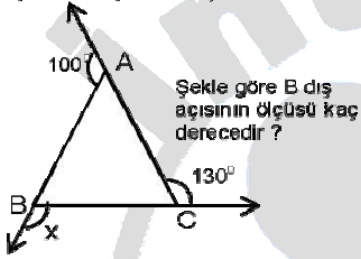
A) 110 B) 115 C) 120 D) 125

16.



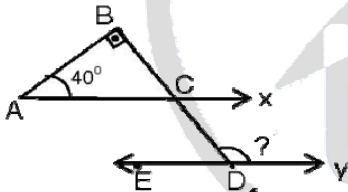
A) 60 B) 65 C) 70 D) 75

17.



A) 120 B) 125 C) 130 D) 135

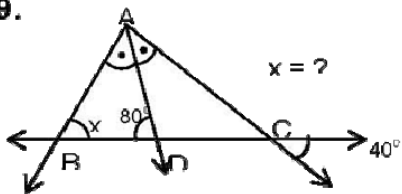
18.



A) 110 B) 115 C) 125 D) 130

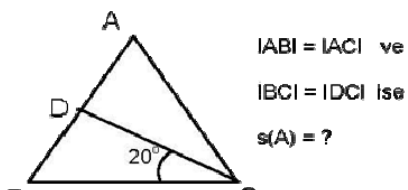
A) 110 B) 115 C) 125 D) 130

19.



A) 40 B) 45 C) 50 D) 60

20.



A) 20 B) 25 C) 30 D) 40

CEVAP ANAHTARI

1. D
2. B
3. A
4. A
5. B
6. C
7. C
8. D
9. D
10. D
11. A
12. B
13. C
14. A
15. B
16. B
17. C
18. D
19. D
20. A

NOT: Ziyaretçilerimiz tarafından eklenen internet paylaşımıdır. Cevap anahtarı yanlış olabilir. Şüphelendiğiniz soruları lütfen kontrol ediniz.