



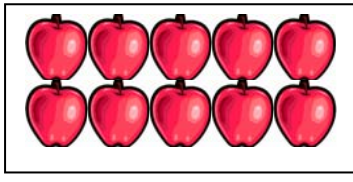
ETKİNLİK&TEST  
ÇIKARMA İŞLEMİ 3

Aşağıdaki örneğe uygun olarak verilen işlemleri yapınız.

10

5

5




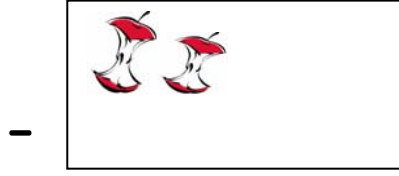

10

-

5

=

5






...

-

...

=

...




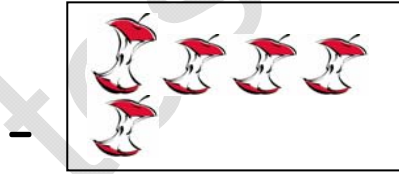

....

-

...

=

....






....

-

...

=

....




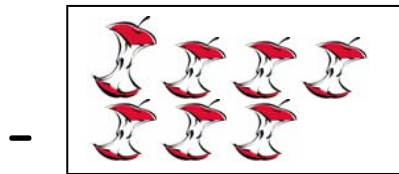
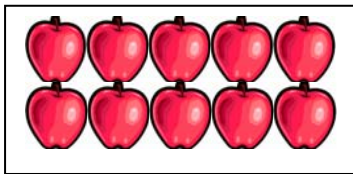
....

-

...

=

....



....

-

....

=

...

ETKİNLİK&TEST  
ÇIKARMA İŞLEMİ 4

Palyaço elindeki topların bir kısmını düşürüyor. Bu resme uygun işlemi yapınız.

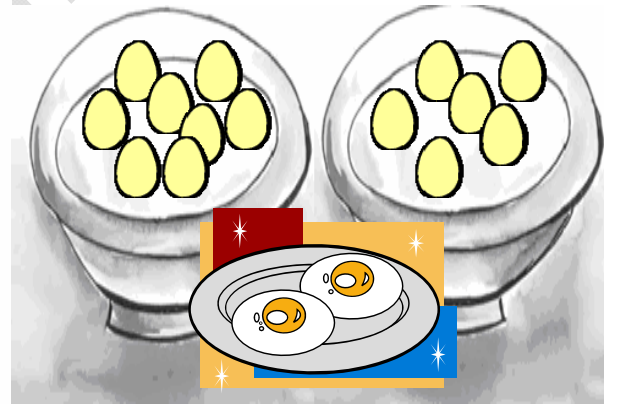


-

Aşağıdaki balonların bir kısmı patlamış. Bu balonlara uygun çıkarma işlemlerini verilen boşluklara yazınız.




Yumurtaları omlet yaptık. İşlemini siz yapın. Kalan yumurtaları bulunuz.





..... - ..... = ....
----------------------

..... - ..... = ....
----------------------



Elmalar düştü.



..... - ..... = ....
----------------------